

Ex 6 Swinging the billy can

Names

Fig. 1 Draw the forces acting on the system consisting of the billy and tea.

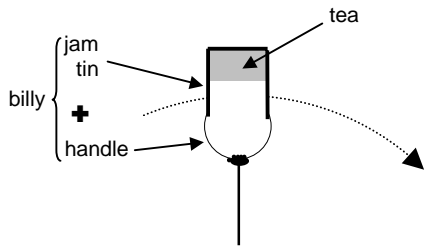


Fig. 2 Draw the forces acting on the tea.

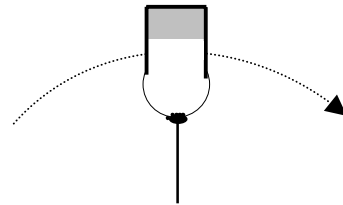


Fig. 3 Draw the forces acting on the billy.

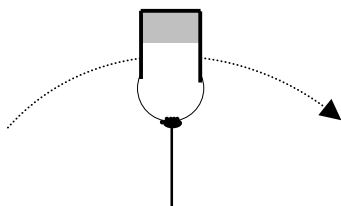


Fig. 4 Draw the forces on the tea at the lowest point in the circle.

